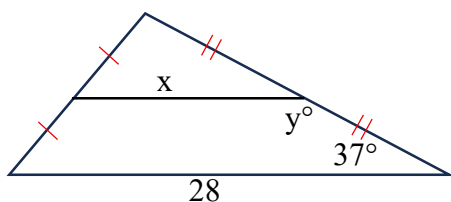


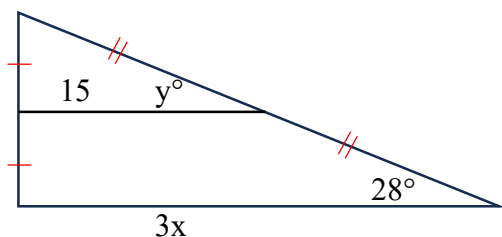
5.1 Homework

Find the value of x and y .

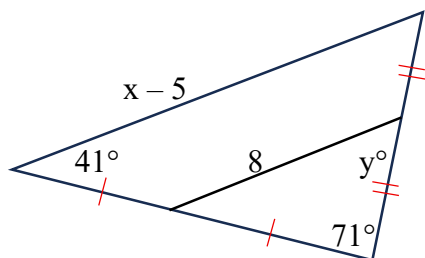
1.



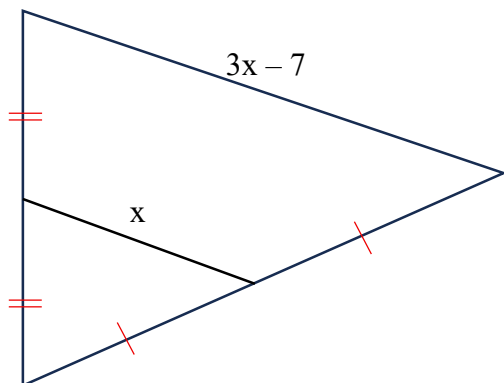
2.



3.



4.



5. Cut out this triangle.

Use a ruler to find the midpoint of each side.

Mark each midpoint, then draw the three midsegments.

Fold the paper along each midsegment line.

Bring the points of the triangle together to form a pyramid.

Turn in the pyramid with your homework.

